

Geography of Australia

Worksheet 1



1. Complete the basic information chart about Australia:

OFFICIAL NAME	
CAPITAL	
CURRENCY	
POPULATION	
LANGUAGE	
POLITICAL SYSTEM	
HEAD OF STATE	
HEAD OF GOVERNMENT	
TIME ZONE	
SURFACE AREA	

<http://www.dfat.gov.au/geo/fs/aust.pdf>

<http://australia.gov.au/topics/australian-facts-and-figures>

2. Draw and explain what it symbolizes:

A coat of arms of Australia	A flag of Australia
	

Geography of Australia

3. Geography of Australia. Look at the map of Australia and complete with:

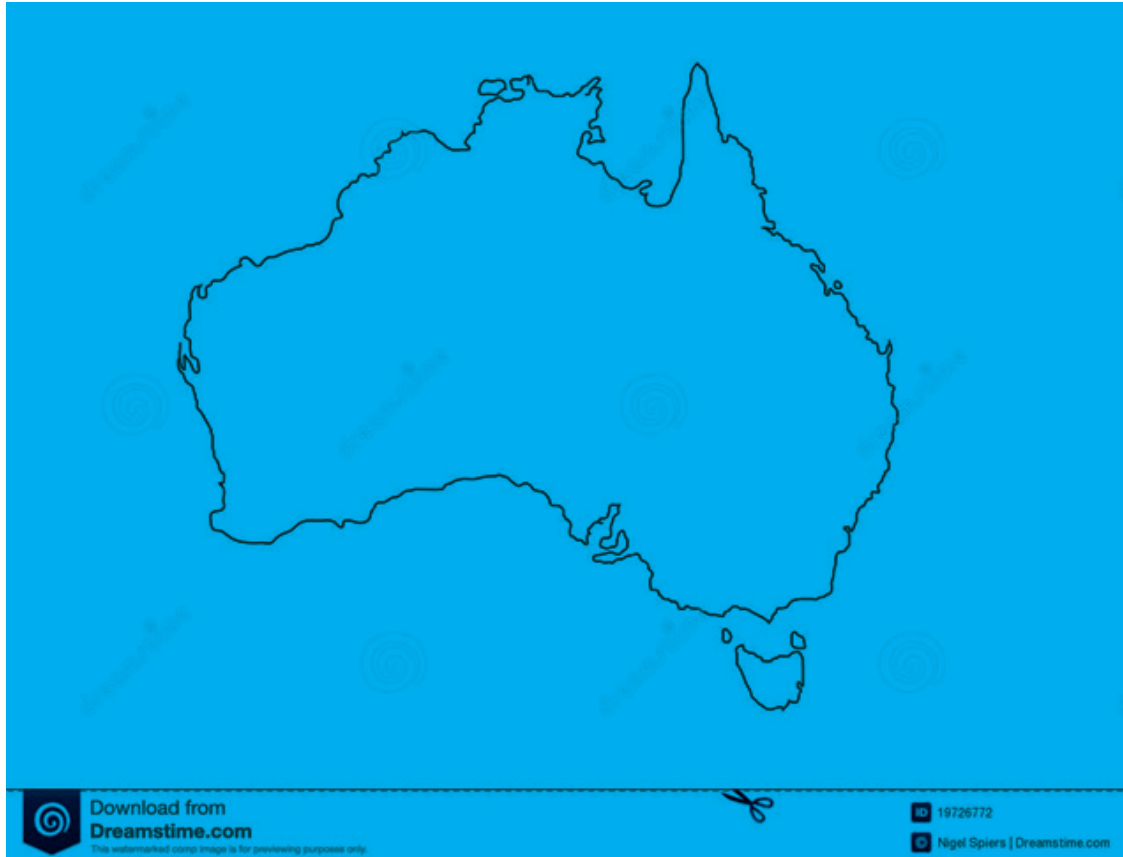
cities: Canberra, Melbourne, Sydney, Perth, Alice Springs, Brisbane, Darwin

mountains: Uluru, Mount Kosciuszko, the Blue Mountains

seas: coral sea, Tasman sea, Timor Sea, Pacific Ocean, Indian Ocean, Great Barrier Reef

ivers: Murray River, Darling River

islands: Tasmania



Complete the sentences:

Australia consists ofstates. They are:.....

.....

Australia consists ofmainland territories, they are:.....

.....

Australia consists ofexternal territories. They are:.....

.....

4. Let's check what you have learnt. Go online and try one of those quizzes:

<http://lizardpoint.com/geography/australia-quiz.php>

<http://www.sporcle.com/games/psubball1/Australia>

<http://travel.nationalgeographic.com/travel/countries/australia-quiz/>